


20 października

Wykonaj poniższe ćwiczenia


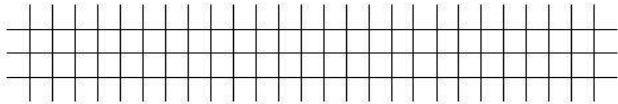
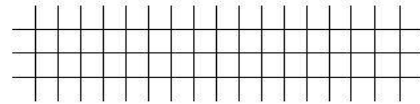
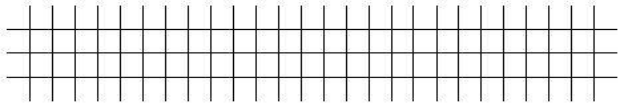

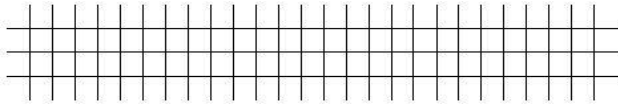
Tabliczka mnożenia i dzielenia w zakresie 30 - mnożenie przez 3



Oblicz według wzoru.


$$3 + 3 + 3 = \dots\dots$$

$$3 \cdot 3 = \dots\dots$$



Tabliczka mnożenia i dzielenia w zakresie 30 - Powtórzenie

Oblicz za pomocą dodawania i mnożenia.



Napisz działania i oblicz wyniki.



$$4 \cdot 3 = \dots$$

$$12 : 3 = \dots$$

